

## 7.1 Under Construction


### *A Develop Understanding Task*



Anciently, one of the only tools builders and surveyors had for laying out a plot of land or the foundation of a building was a piece of rope.

There are two geometric figures you can create with a piece of rope: you can pull it tight to create a line segment, or you can fix one end, and—while extending the rope to its full length—trace out a circle with the other end. Geometric constructions have traditionally mimicked these two processes using an unmarked straightedge to create a line segment and a compass to trace out a circle (or sometimes a portion of a circle called an arc). Using only these two tools you can construct all kinds of geometric shapes.

Suppose you want to construct a rhombus using only a compass and straightedge. You might begin by drawing a line segment to define the length of a side, and drawing another ray from one of the endpoints of the line segment to define an angle, as in the following sketch.



Now the hard work begins. We can't just keep drawing line segments, because we have to be sure that all four sides of the rhombus are the same length. We have to stop drawing and start constructing.

Constructing a rhombus

Knowing what you know about circles and line segments, how might you locate point  $C$  on the ray in the diagram above so the distance from  $B$  to  $C$  is the same as the distance from  $B$  to  $A$ ?

1. Describe how you will locate point  $C$  and how you know  $\overline{BC} \cong \overline{BA}$ , then construct point  $C$  on the diagram above.

Now that we have three of the four vertices of the rhombus, we need to locate point  $D$ , the fourth vertex.

2. Describe how you will locate point  $D$  and how you know  $\overline{CD} \cong \overline{DA} \cong \overline{AB}$ , then construct point  $D$  on the diagram above.

Constructing a Square (A rhombus with right angles)

The only difference between constructing a rhombus and constructing a square is that a square contains right angles. Therefore, we need a way to construct perpendicular lines using only a compass and straightedge.

We will begin by inventing a way to construct a perpendicular bisector of a line segment.

3. Given  $\overline{RS}$  below, fold and crease the paper so that point  $R$  is reflected onto point  $S$ . Based on the definition of reflection, what do you know about this “crease line”?



You have “constructed” a perpendicular bisector of  $\overline{RS}$  by using a paper-folding strategy. Is there a way to construct this line using a compass and straightedge?

4. Experiment with the compass to see if you can develop a strategy to locate points on the “crease line”. When you have located at least two points on the “crease line” use the straightedge to finish your construction of the perpendicular bisector. Describe your strategy for locating points on the perpendicular bisector of  $\overline{RS}$ .

Now that you have created a line perpendicular to  $\overline{RS}$  we will use the right angle formed to construct a square.

5. Label the midpoint of  $\overline{RS}$  on the diagram above as point  $M$ . Using segment  $\overline{RM}$  as one side of the square, and the right angle formed by segment  $\overline{RM}$  and the perpendicular line drawn through point  $M$  as the beginning of a square. Finish constructing this square on the diagram above. (Hint: Remember that a square is also a rhombus, and you have already constructed a rhombus in the first part of this task.)

**READY, SET, GO!**

Name \_\_\_\_\_

Period \_\_\_\_\_

Date \_\_\_\_\_

### READY

Topic: Tools for construction and geometric work.

1. Using your compass draw several concentric circles that have point A as a center and then draw those same sized concentric circles that have B as a center. What do you notice about where all the circles with center A intersect all the corresponding circles with center B?

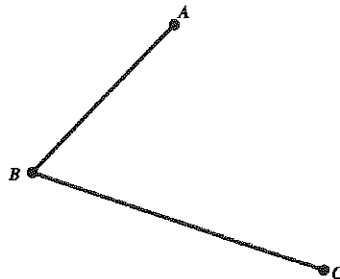
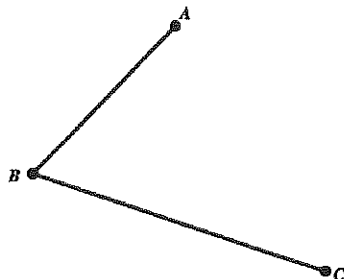


2. In the problem above you have demonstrated one way to find the midpoint of a line segment. Explain another way that a line segment can be bisected without the use of circles.


### SET

Topic: Constructions with compass and straight edge.


3. Bisect the angle below do it with compass and straight edge as well as with paper folding.



4. Copy the segment below using construction tools of compass and straight edge, label the image  $D'E'$ .




5. Copy the angle below using construction tool of compass and straight edge.



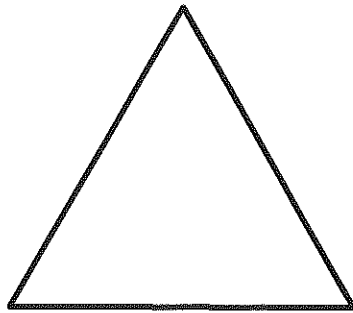
6. Construct a rhombus on the segment  $AB$  that is given below and that has point  $A$  as a vertex. Be sure to check that your final figure is a rhombus.



7. Construct a square on the segment CD that is given below. Be sure to check that your final figure is a square.



8. Given the equilateral triangle below, find the center of rotation of the triangle using compass and straight edge.



**GO**

Topic: Solving systems of equations

Solve each system of equations. Utilize substitution, elimination, graphing or matrices.

$$9. \begin{cases} x = 11 + y \\ 2x + y = 19 \end{cases}$$

$$10. \begin{cases} -4x + 9y = 9 \\ x - 3y = -6 \end{cases}$$

$$11. \begin{cases} x + 2y = 11 \\ x - 4y = 2 \end{cases}$$

$$12. \begin{cases} y = -x + 1 \\ y = 2x + 1 \end{cases}$$

$$13. \begin{cases} y = -2x + 7 \\ -3x + y = -8 \end{cases}$$

$$14. \begin{cases} 4x - y = 7 \\ -6x + 2y = 8 \end{cases}$$