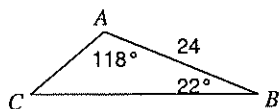


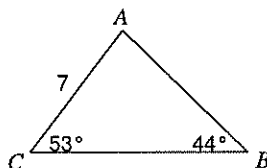
The Law of Sines

Find each measurement indicated. Round your answers to the nearest tenth.

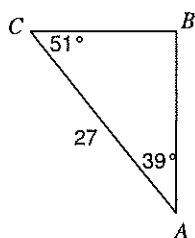
1) Find AC



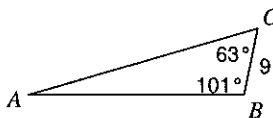
2) Find AB



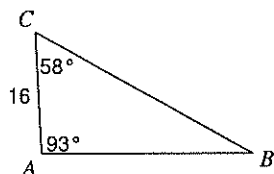
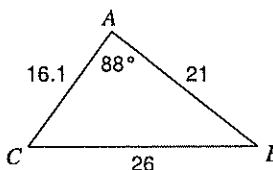
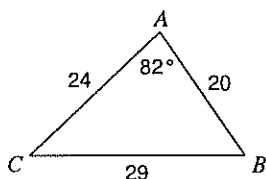
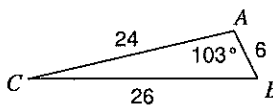
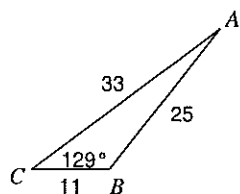
3) Find BC



4) Find AB



5) Find BC

6) Find $m\angle C$ 7) Find $m\angle C$ 8) Find $m\angle C$ 9) Find $m\angle A$ 10) Find $m\angle C$ 